




Choose the best answer.

1. Which is the standard form of sixty-nine thousand, six hundred ninety-nine?
A 60,699
B 69,600
C 69,690
D 69,699
2. **Mental Math** Darren has 50 baseball cards and 23 football cards. What is the total number of cards Darren has?
A 53
B 55
C 70
D 73
3. Which unit would you use to measure the length of your classroom?
A Pound
B Foot
C Gallon
D Degree
4. Which number has the greatest value?
A 5,445
B 4,455
C 5,544
D 4,554

Use the table for 5 through 8.

National Champion Trees	
Tree	Height (in ft)
Giant sequoia	275
Sugar pine	232
Coast Douglas fir	281
Port Orford cedar	219
Coast redwood	321

In 5–7, compare the heights of the two trees. Use $<$, $>$, or $=$.

5. Giant sequoia  Coast redwood
6. Sugar pine  Port Orford cedar
7. Coast Douglas fir  Coast redwood
8. What is the height of a tree that has a greater height than a giant sequoia but less height than a coast Douglas fir?

_____ feet